

Question Bank

Grade 2

Mathematics

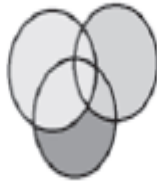
Chapter 1—POSITION & SHAPES

A. Circle the shapes that have only straight lines in red. Circle the shapes that have only curved lines in blue. Circle the shapes that have both straight lines and curved lines in purple.

1.



2.



3.



4.



5.



B. Match the solid shape with the correct plane shapes.

1.



a.



2.



b.



3.



c.



4.



d.



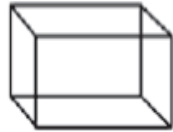
C. One of the following shapes has been wrongly named. Tick that shape and write the shape in the blank.



Cylinder



Sphere



Cuboid



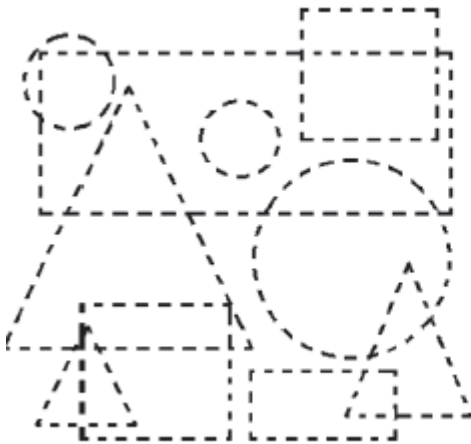
Cuboid



Cone

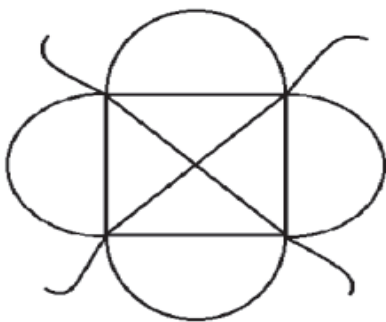
.....

D. Join the dots to complete these images. Count the number of each shape and fill in the blanks.



1. Squares: _____
2. Rectangles: _____
3. Circles: _____
4. Triangles: _____

E. Count the number of straight lines and curved lines in this diagram and fill in the blanks.



Straight lines: _____

Curved lines: _____

F. Choose the letter which is made up of only straight lines.

- a) S b) C c) F

G. The number of faces of a cuboid is :

- a) 4 b) 0 c) 6

.....

THE END